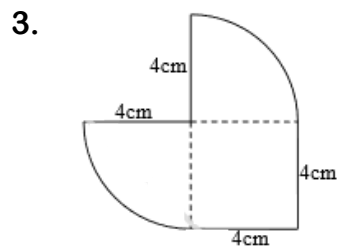
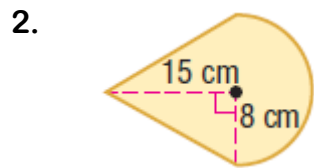
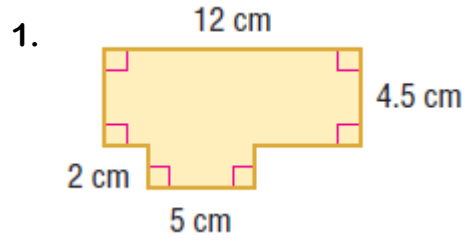


Name _____
HW #8.5

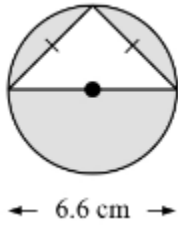
Date _____
Period _____

Find the area of each figure. Round to the nearest tenth if necessary.



Find the area of the shaded region. Round to the nearest hundredth if necessary.

4.



5.

